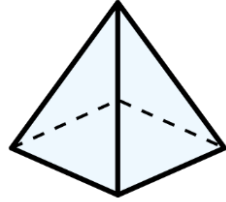




1) How many edges does this pyramid have?




2) Which shape is the odd one out?



3) Multiply 5 by 9

4) Use $<$, $>$ or $=$ to compare.

$$30 + 4 \bigcirc 3 \text{ ones} + 4 \text{ tens}$$



What time is it?